


How many rows?

How many columns?

Write repeated additions for each array.

How many mangoes are there?




_____ rows

_____ columns


$$6 + 6 =$$

$$2 + 2 + 2 + 2 + 2 + 2 =$$


How many bananas are there?




How many apples are there?



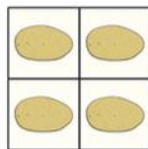
How many strawberries are there?



How many peppers are there?



How many potatoes are there?



How many oranges are there?

